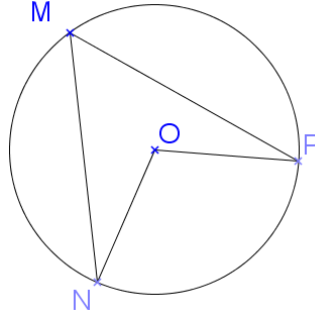


Fiche d'exercices : Angle inscrit angle au centre

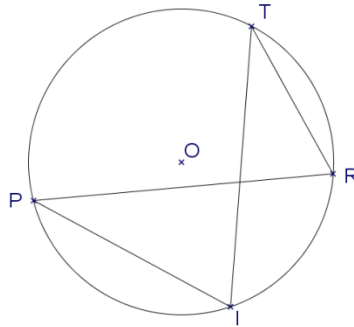
Exercice n°1:

Sachant que $\widehat{NMP} = 58^\circ$, calculer \widehat{NOP}



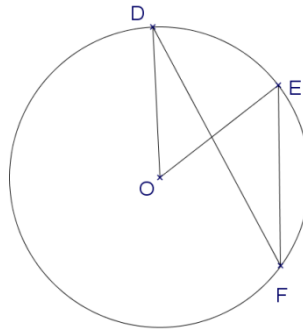
Exercice n°2:

Sachant que $\widehat{IPR} = 21^\circ$, calculer \widehat{ITR}



Exercice n°3:

Sachant que $\widehat{DOE} = 42^\circ$, calculer \widehat{DFE} .



Exercice n°4:

Sachant que $\widehat{DAB} = 26^\circ$,

- 1) Déterminer \widehat{DCB}
- 2) Calculer \widehat{DOB}

